



IB MUSIC IV

SCALES, INTERVALS, MODES, AND TRIADS

Part I. Scales

1. Write an E major scale.
2. Write an E natural minor scale.
3. Write an E harmonic minor scale.

Part II. Intervals

Identify the interval displayed.

4. 

5. 

6. 

7. 

8. 

9. 

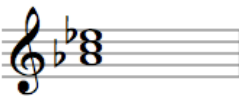
Part III. Modes

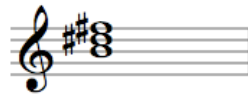
10. Write a C Dorian scale.
11. Write a D Mixolydian scale.
12. What scale is this?

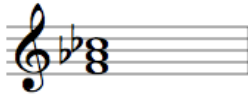


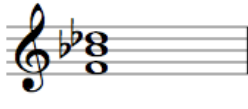
Part IV. Triads

Identify the quality (major, minor, augmented, diminished) of the triad displayed.

13. 

14. 

15. 

16. 

17. 

18. 

19. 

Part V. Bonus Question

20. Who is Mr. Brown's favorite composer?